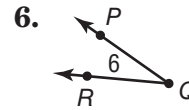
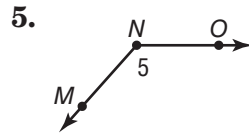
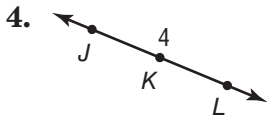
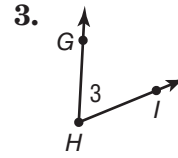
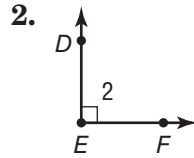
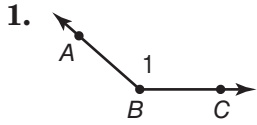


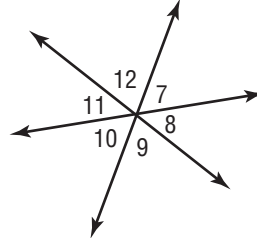
Lesson 1 Skills Practice

Classify Angles

Name each angle in four ways. Then classify the angle as *acute*, *right*, *obtuse*, or *straight*.



Refer to the diagram at the right. Identify each angle pair as *adjacent*, *vertical*, or *neither*.



7. $\angle 7$ and $\angle 12$

8. $\angle 8$ and $\angle 11$

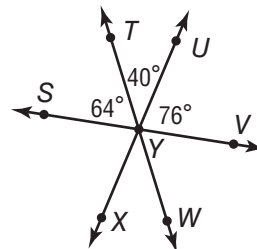
9. $\angle 7$ and $\angle 10$

10. $\angle 9$ and $\angle 11$

11. $\angle 8$ and $\angle 9$

12. $\angle 10$ and $\angle 12$

Refer to the figure at the right to determine the measure of each given angle.



13. $\angle SYX$

14. $\angle XYW$

15. $\angle WYV$

16. $\angle SYW$

17. $\angle TYX$

18. $\angle VYX$