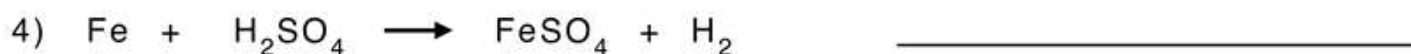
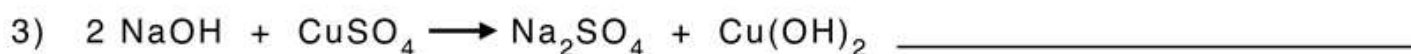
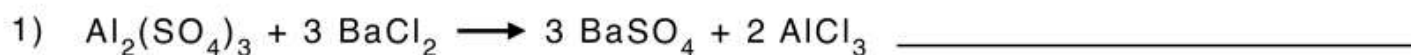


Name : \_\_\_\_\_

Score : \_\_\_\_\_ Date : \_\_\_\_\_

## Classifying Chemical Reactions

A. Classify the following reaction as synthesis, decomposition, single-replacement, double-replacement, and combustion:



B. Balance the following equations and indicate the type of reaction:

